





Use the array provided to solve each problem.


1) $69 \times 52 =$



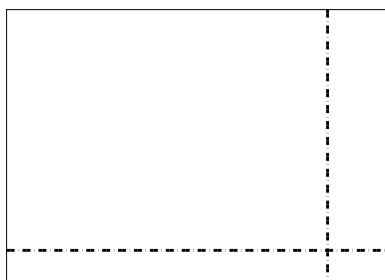
2) $37 \times 29 =$




3) $33 \times 24 =$




4) $34 \times 48 =$



5) $42 \times 27 =$



6) $44 \times 42 =$



Answers

1. _____

2. _____

3. _____

4. _____

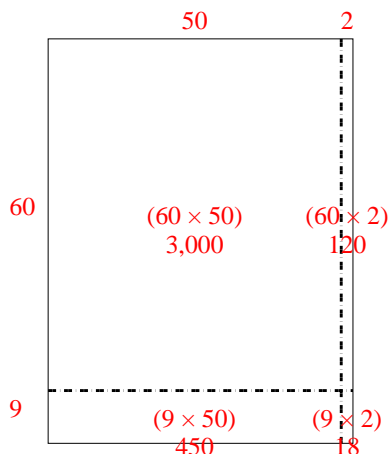
5. _____

6. _____

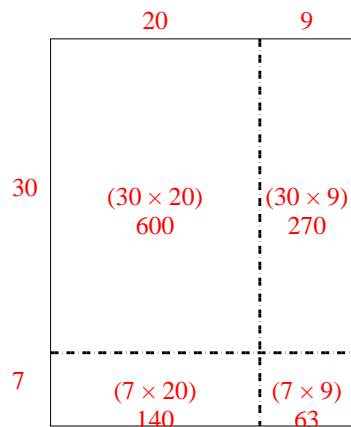


Use the array provided to solve each problem.

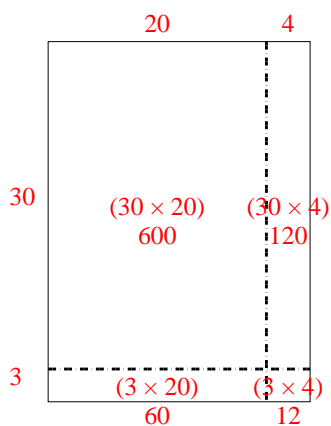
1) $69 \times 52 =$



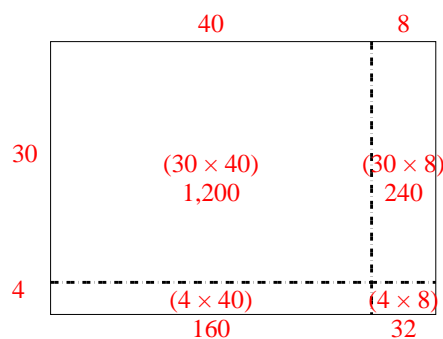
2) $37 \times 29 =$



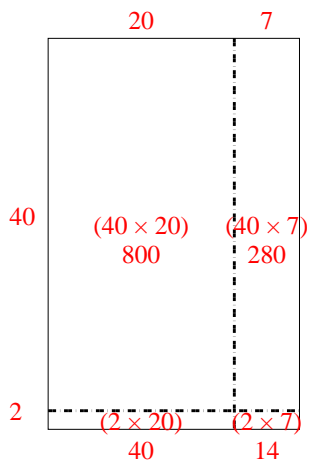
3) $33 \times 24 =$



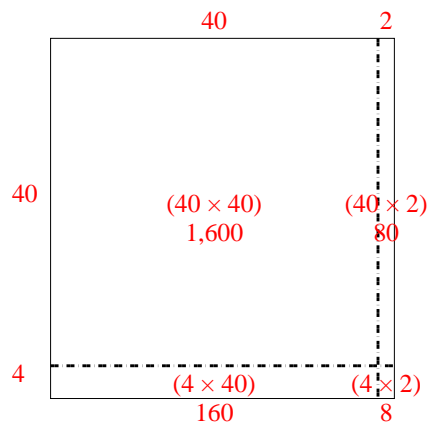
4) $34 \times 48 =$



5) $42 \times 27 =$



6) $44 \times 42 =$



Answers

1. **3,588**

2. **1,073**

3. **792**

4. **1,632**

5. **1,134**

6. **1,848**